













# STUDY GUIDE

**DIRECTIONS:** Identify the command that each icon represents. Then, explain what each command does or what it can or for what it can be used.

COMMAND	WHAT IT DOES
1. 	_____
2. 	_____
3. 	_____
4. 	_____
5. 	_____
6. 	_____
7. 	_____
8. 	_____
9. 	_____
10. 	_____
11. 	_____
12. 	_____
13. 	_____
14. 	_____

**DIRECTIONS:** Explain how to complete each of the following tasks in AutoCAD.

1. Change the polar snapping for an isometric drawing:

2. Oblique a dimension for an isometric drawing:

3. Use orthographic projection to create a 3-view drawing:

4. Create a section view of an object:

5. Create a floor plan using architectural units: