









## STUDY GUIDE

**DIRECTIONS:** Identify the command that each icon represents. Then, explain what each command does or what it can or for what it can be used.

	<u>3D COMMAND</u>	<u>WHAT IT DOES</u>
1.		_____
2.		_____
3.		_____
4.		_____
5.		_____
6.		_____
7.		_____
8.		_____

**DIRECTIONS:** Explain how to complete each of the following tasks in AutoCAD or Inventor.

1. Create a square transition using radial pattern development:

2. Create a circular transition using radial pattern development:

3. Create a work plane:

4. Using the loft command to create a 3D solid:

5. Using the shell command to hollow out a solid: