















# STUDY GUIDE

**DIRECTIONS:** Identify the command that each icon represents. Then, explain what each command does or what it can or for what it can be used.

**NAME** \_\_\_\_\_

<u>COMMAND</u>	<u>WHAT IT DOES</u>
1. 	_____
2. 	_____
3. 	_____
4. 	_____
5. 	_____
6. 	_____
7. 	_____
8. 	_____
9. 	_____
10. 	_____
11. 	_____
12. 	_____
13. 	_____
14. 	_____

**DIRECTIONS:** Explain how to complete each of the following tasks in AutoCAD.

1. Explain simple guidelines for correctly drawing a 2-story floor plan:

2. Describe the components for quality plot plan:

3. Explain the process for creating a block:

4. List simple guidelines for correctly dimensioning and labeling a floor plan:

5. Explain basic A.D.A. guidelines and their purposes: